

Year1 -Maths
Block 1 Assessment



Name:

Date:

Key Objectives Assessed	Part 1	Part 2
Count reliably at least 20 objects	3,4	
Count on/back in 1's from any small number & in 10's from/back to 0	11	11
Read/write/order numbers from 0 to at least 20. Understand and use vocabulary of comparing and ordering these numbers	1,2,7,8,14	2
Understand the operation of + and - and use related vocabulary	12	1,9,11,12
Know by heart all pairs of numbers with a total of 10	13	8
Use mental strategies to solve simple problems using counting, +,-	15	3,4,10,15
Compare two masses by direct comparison	10	
Use everyday language to describe features of 2D and 3D shapes	5,6	
Other Objectives Assessed		
Begin to recognise odd/even numbers as every other number	9	7
Recognise coins of different values and find totals		13
Read the time to the hour/half hour on an analogue clock. Understand vocabulary related to time		5, 6,14
Sort, classify,and organise information using pictures. Discuss and explain results		14

<u>MARK</u>	<u>LEVEL</u>
<input type="text"/>	<input type="text"/>

Year 1 Block Assessment 1 (part 1)

1. Write the missing numbers.


1	2			5	6	7	
---	---	--	--	---	---	---	--

(1)

2. Write the number seven in the box.

(1)


3.



Draw 6 spots on the butterfly


(1)

4. How many rocking horses?



(1)

5. What is the name of this shape?



Put a circle around the correct answer.

triangle square rectangle


(1)

6. Continue the pattern.




(1)

7. Write a number in the box so that the three numbers are in order.



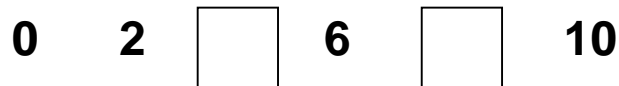
(1)

8. Write the numbers between 15 and 20



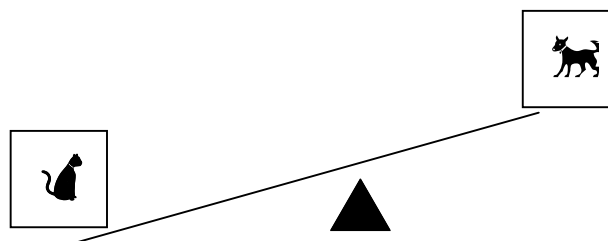
(2)

9. Write the missing numbers.



(1)

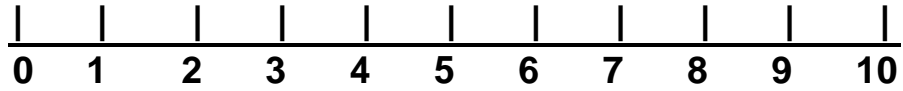
10. Tick (✓) the heavier animal.



(1)

11.

Start at 2. Count on 5. What number do you land on?



2 count on 5 is

(1)

12.

5 plus 3 =

(1)

13.

+ 5 = 10

(1)

14.

Which is more? Put a ✓ next to the correct answer

23p or 13p

(1)

15.

I'm thinking of a number. I take 7 from it and the answer is 3. What is my number?

(1)


Year 1 Block Assessment 1 (part 2)

1. Write 1 more than 8

Write 1 less than 6


(2)

2. Put a circle around the 4th dog



(1)

3.



(1)

4. John has 5 sweets. He eats 2. How many has he left?


(1)

5. When do you eat breakfast? Put a ✓ in the correct box.

evening morning afternoon

(1)

6. What time is it?



o'clock

(1)

7. Put a ✓ on the odd numbers

2 3 5 6 9 16

(2)

8. $10 = \square + 8$

(1)

9. 9 take away 5 is

(1)

10. A boy has 12 sweets. He gives 5 away. How many are left?

sweets

(1)

11. more than 4 = 10

(1)

12. **3 less than 10 is**


(1)


13. **Tick the coins to total 8p**


5p 10p 1p 2p 1p

(1)

14. **A pictogram to show the times a class go to bed**

7 o'clock 

half past 7 

8 o'clock 

How many children go to bed at 8 o'clock?

How many children in the class altogether?

(2)

15. **What is double 4 plus 2?**

(1)